



### Assignment 8.1 Geometry Constructions & Congruence

1. What are the two tools that we use to do geometric constructions?

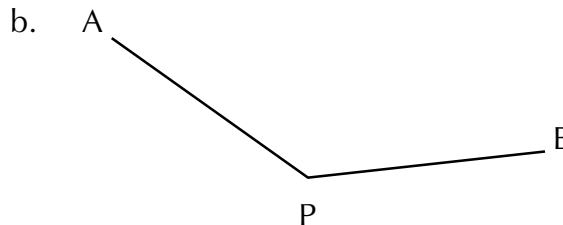
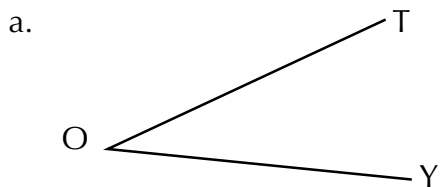
2. Give both correct names for each of the given line segments using proper notation.



3. Name all three potential line segments for given line segment using proper notation.



4. Give both correct names for each of the given angles using proper notation.



5. Explain to a parent or sibling the steps for copying a line segment (without using your notes).

6. Explain to a parent or sibling the steps for copying an angle (without using your notes).

Name: \_\_\_\_\_ Relationship: \_\_\_\_\_

Were the explanations clear and easy to understand? Yes No